

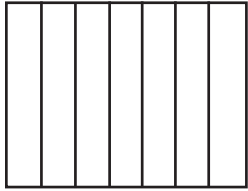
# Fractions

Name \_\_\_\_\_ Date \_\_\_\_\_

Color the shape to show the fraction.

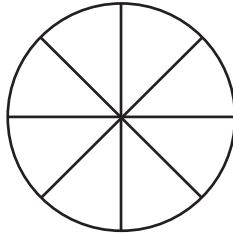
1.

$$\frac{4}{7} =$$



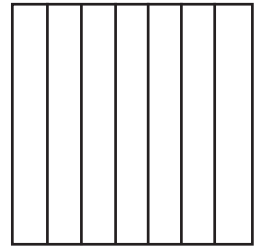
2.

$$\frac{2}{8} =$$



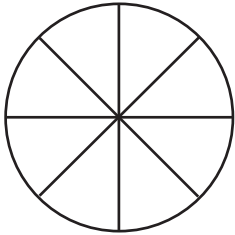
3.

$$\frac{3}{7} =$$



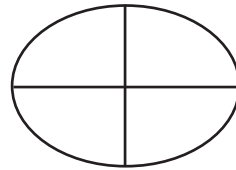
4.

$$\frac{5}{8} =$$



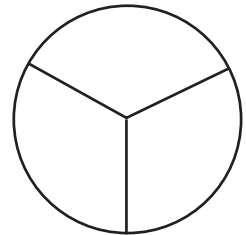
5.

$$\frac{4}{4} =$$



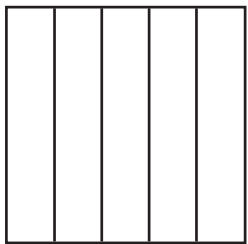
6.

$$\frac{1}{3} =$$



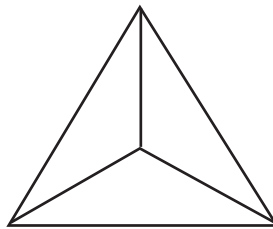
7.

$$\frac{2}{5} =$$



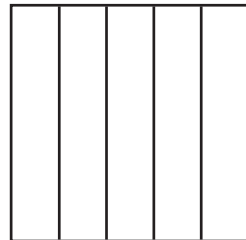
8.

$$\frac{2}{3} =$$



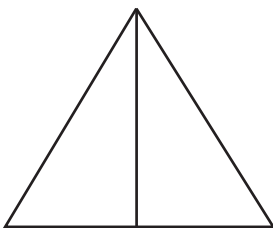
9.

$$\frac{1}{5} =$$



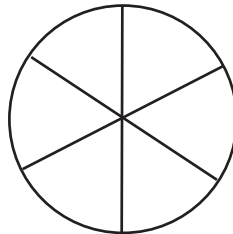
10.

$$\frac{1}{2} =$$



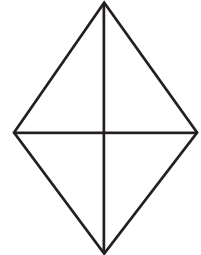
11.

$$\frac{5}{6} =$$



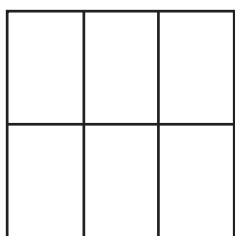
12.

$$\frac{3}{4} =$$



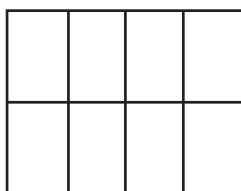
13.

$$\frac{3}{6} =$$



14.

$$\frac{3}{8} =$$



15.

$$\frac{6}{6} =$$

